

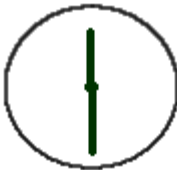



# EB05 Telling Time 2

What time is it?

Can I have the time?


 ____ : ____ In words: _____	 ____ : ____ In words: _____	 ____ : ____ In words: _____	 ____ : ____ In words: _____
--	--	---	--

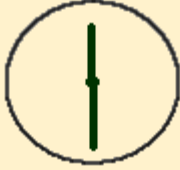
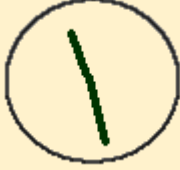
## Naturally speaking

Exactly or about

	Exactly	About
<b>14.00</b> It's <b>exactly</b> 2.00pm.	<b>14.28</b> It's <b>about</b> 2.30pm.	

How to ask the time ?


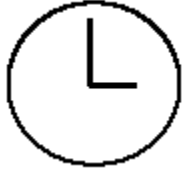
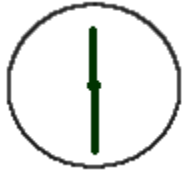
	<ul style="list-style-type: none"> <li>• Excuse me. What time is it please?</li> </ul>	<ul style="list-style-type: none"> <li>• It's <b>exactly</b> eight o'clock.</li> <li>or</li> <li>• It's eight.</li> </ul>
---	--	---

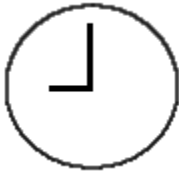
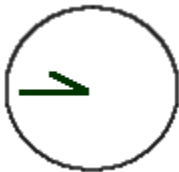


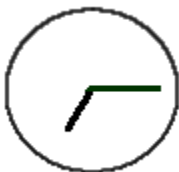
	<ul style="list-style-type: none"> <li>Excuse me. Do you have the time please?</li> </ul>	<ul style="list-style-type: none"> <li>It's half past twelve.</li> </ul> <p>or</p> <ul style="list-style-type: none"> <li>It's twelve thirty.</li> </ul>
	<ul style="list-style-type: none"> <li>Excuse me. Could you tell me the time please?</li> </ul>	<ul style="list-style-type: none"> <li>It's <b>about</b> half past eleven.</li> </ul> <p>or</p> <ul style="list-style-type: none"> <li>It's <b>about</b> eleven thirty.</li> </ul>

## Match It - Time (2)

Matching exercise

Match the time on the right with the clocks on the left.

	<p>Quarter to ten / Quarter past seven / Nine o'clock / Eight o'clock / Quarter past twelve / Quarter to one / One o'clock / Half past eleven / Half past twelve / Three o'clock</p>
	<p>Quarter to ten / Quarter past seven / Nine o'clock / Eight o'clock / Quarter past twelve / Quarter to one / One o'clock / Half past eleven / Half past twelve / Three o'clock</p>
	<p>Quarter to ten / Quarter past seven / Nine o'clock / Eight o'clock / Quarter past twelve / Quarter to one / One o'clock / Half past eleven / Half past twelve / Three o'clock</p>

	<p>Quarter to ten /Quarter past seven /Nine o'clock /Eight o'clock /Quarter past twelve /Quarter to one /One o'clock/ Half past eleven /Half past twelve / Three o'clock</p>
	<p>Quarter to ten / Quarter past seven/ Nine o'clock / Eight o'clock/Quarter past twelve/ Quarter to one /One o'clock /Half past eleven /Half past twelve /Three o'clock</p>
	<p>Quarter to ten / Quarter past seven/ Nine o'clock/ Eight o'clock /Quarter past twelve / Quarter to one /One o'clock /Half past eleven / Half past twelve/ Three o'clock</p>
	<p>Quarter to ten / Quarter past seven / Nine o'clock / Eight o'clock /Quarter past twelve / Quarter to one / One o'clock / Half past eleven / Half past twelve / Three o'clock</p>
	<p>Quarter to ten / Quarter past seven/ Nine o'clock / Eight o'clock /Quarter past twelve/ Quarter to one / One o'clock /Half past eleven / Half past twelve/ Three o'clock</p>



Quarter to ten /Quarter past seven/ Nine o'clock  
/Eight o'clock /Quarter past twelve Quarter to  
one /One o'clock /Half past eleven/ Half past  
twelve /Three o'clock



Quarter to ten/ Quarter past seven/ Nine  
o'clock/ Eight o'clock/ Quarter past twelve/  
Quarter to one/ One o'clock/ Half past eleven  
/Half past twelve / Three o'clock